








REVIEW 1

SCHOOL YEAR 2019 - 2020
ENGLISH FOR PRIMARY MATHS 1

PART 1:

Write one letter to fill the blank.

1. <u>C</u> ount 	2. <u>_</u> ine 	3. <u>_</u> reater 	4. <u>_</u> lus 	5. <u>_</u> quare 
---	--	---	--	--

PART 2:

Look and match.







zero five eight seven two



PART 3:



Fill in the blanks with “greater”, “less”, or “equal”.



Example:

0.  Three is greater than one. 

1.  Two is _____ than five. 

2.  Six is _____ to six. 

3.  Four is _____ than six. 

4.  Eight is _____ than five. 

PART 4:

There are 4 frogs in the pond and 5 on the ground.
How many frogs are there altogether?

Summary:

In the pond : frogs
On the ground : frogs

Write the suitable number sentence.

--	--	--	--	--

There are frogs

